



PUBLIC SCHOOL DARBHANGA
SESSION (2020-21)
CLASS-3
S.ST
LANDFORM ACTIVITY

Key



Mountain



cave



canyon









island



hil



volcano

5					
4					
3					
2					
1					

LOCATION of each ITEM:

MOUNTAIN		island	
cave		hill	
canyon		volcano	







Write down the direction of each location. (NORTH, SOUTH, EAST, WEST)

You are AT THE hill. You WANT TO go to the mountain. Which direction should you


go? You are at the cave. You want to go to the island. Which direction should you go?

Answers Key

Key

	Mountain
	cave
	canyon
	island
	hil
	volcano

5
4
3
2
1



WRITE THE LOCATION of each item:

MOUNTAINS	C, 4	island	E, 3
cave	B, 3	hill	C, 2
canyon	A, 1	volcano	A, 5

Write down the direction of each location. (NORTH, SOUTH, EAST, WEST)

You are AT THE hill. You WANT TO go to the mountain. Which direction should you go?

ANS: NORTH

You are at the cave. You want to go to the island. Which direction should you go? Ans: EAST