



# PUBLIC SCHOOL DARBHANGA

SESSION ( 2020-21)

CLASS-IX

MATHEMATICS

HERON'S FORMULA

WORKSHEET(ANSWER KEY)

1. A kite in the shape of a square with a diagonal 32 cm and an isosceles triangle of base 8 cm and sides 6 cm each is to be made of three different shades as shown in Fig. 12.17.

How much paper of each shade has been used in it?

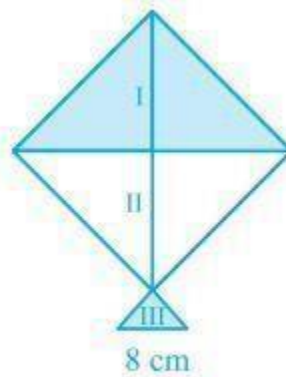


Fig. 12.17

### Solution:

For each triangular piece, The semi perimeter will be

$$s = (50 + 50 + 20)/2 \text{ cm} = 120/2 \text{ cm} = 60\text{cm}$$

Using Heron's formula,

$$\text{Area of the triangular piece} = \sqrt{[s (s-a) (s-b) (s-c)]}$$

$$= \sqrt{[60(60 - 50) (60 - 50) (60 - 20)]} \text{ cm}^2$$

$$= \sqrt{[60 \times 10 \times 10 \times 40]} \text{ cm}^2$$

$$= 200\sqrt{6} \text{ cm}^2$$

$$\therefore \text{The area of all the triangular pieces} = 5 \times 200\sqrt{6} \text{ cm}^2 = 1000\sqrt{6} \text{ cm}^2$$

2. A floral design on a floor is made up of 16 tiles which are triangular, the sides of the triangle being 9 cm, 28 cm and 35 cm (see Fig. 12.18). Find the cost of polishing the tiles at the rate of 50p per  $\text{cm}^2$ .

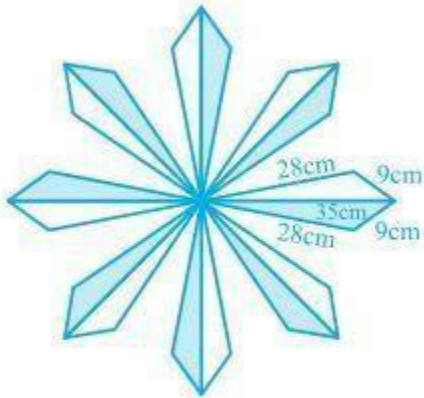


Fig. 12.18

The semi perimeter of the each triangular shape =  $(28 + 9 + 35)/2 \text{ cm} = 36 \text{ cm}$

By using Heron's formula,

The area of each triangular shape will be

$$\begin{aligned} & \sqrt{s(s-a)(s-b)(s-c)} \\ & \left( \sqrt{36 \times (36 - 35) \times (36 - 28) \times (36 - 9)} \right) \\ & \left( \sqrt{36 \times 1 \times 8 \times 27} \right) \text{ cm}^2 \\ & = 36\sqrt{6} \text{ cm}^2 = 88.2 \text{ cm}^2 \end{aligned}$$

Now, the total area of 16 tiles =  $16 \times 88.2 \text{ cm}^2 = 1411.2$

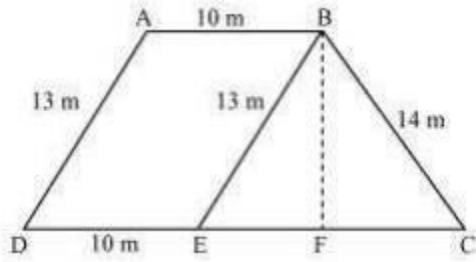
$\text{cm}^2$  It is given that the polishing cost of tiles = 50 paise/ $\text{cm}^2$

$\therefore$  The total polishing cost of the tiles = Rs.  $(1411.2 \times 0.5) = \text{Rs. } 705.6$

3. A field is in the shape of a trapezium whose parallel sides are 25 m and 10 m. The non-parallel sides are 14 m and 13 m. Find the area of the field.

**Solution:**

First, draw a line segment BE parallel to the line AD. Then, from B, draw a perpendicular on the line segment CD.



Now, it can be seen that the quadrilateral ABED is a parallelogram. So,

$$AB = ED = 10 \text{ m}$$

$$AD = BE = 13 \text{ m}$$

$$EC = 25 - ED = 25 - 10 = 15 \text{ m}$$

Now, consider the triangle BEC,

$$\text{Its semi perimeter } (s) = (13 + 14 + 15)/2 = 21 \text{ m}$$

By using Heron's formula,

Area of  $\triangle BEC =$

$$\sqrt{s(s-a)(s-b)(s-c)}$$

$$\left( \sqrt{21 \times (21 - 13) \times (21 - 14) \times (21 - 15)} \right) m^2$$

$$\left( \sqrt{21 \times 8 \times 7 \times 6} \right) m^2$$

$$= 84 \text{ m}^2$$

We also know that the area of  $\triangle BEC = (\frac{1}{2}) \times CE \times$

$$BF \quad 84 \text{ m}^2 = (\frac{1}{2}) \times 15 \times BF$$

$$\Rightarrow BF = (168/15) \text{ m} = 11.2 \text{ m}$$

So, the total area of ABED will be  $BF \times DE$  i.e.  $11.2 \times 10 = 112 \text{ m}^2$

$$\therefore \text{Area of the field} = 84 + 112 = 196 \text{ m}^2$$

**4. An isosceles right triangle has area  $8 \text{ cm}^2$ . The length of its hypotenuse is**

(A)  $\sqrt{32} \text{ cm}$

(B)  $\sqrt{16} \text{ cm}$

(C)  $\sqrt{48} \text{ cm}$

(D)  $\sqrt{24} \text{ cm}$  **Solution:**

**(A)  $\sqrt{32}$  cm**

Explanation:

Let height of triangle = h

As the triangle is isosceles,

Let base = height = h

According to the question,

Area of triangle =  $8\text{cm}^2$

$\Rightarrow \frac{1}{2} \times \text{Base} \times \text{Height} = 8$

$\Rightarrow \frac{1}{2} \times h \times h = 8$

$\Rightarrow h^2 = 16$

$\Rightarrow h = 4\text{cm}$

Base = Height = 4cm

Since the triangle is right angled,

Hypotenuse<sup>2</sup> = Base<sup>2</sup> + Height<sup>2</sup>

$\Rightarrow \text{Hypotenuse}^2 = 4^2 + 4^2$

$\Rightarrow \text{Hypotenuse}^2 = 32$

$\Rightarrow \text{Hypotenuse} = \sqrt{32}$

Hence, Options A is the correct answer.

**5. The perimeter of an equilateral triangle is 60 m. The area is**

**(A)  $10\sqrt{3}$  m<sup>2</sup>**

**(B)  $15\sqrt{3}$  m<sup>2</sup>**

**(C)  $20\sqrt{3}$  m<sup>2</sup>**

**(D)  $100\sqrt{3}$  m<sup>2</sup> Solution: (D)  $100\sqrt{3}$  m<sup>2</sup>**

Explanation:

Area of an equilateral triangle of side a =  $\frac{\sqrt{3}}{4} a^2$

According to the question,

Perimeter of triangle = 60m

$$\Rightarrow a + a + a = 60$$

$$\Rightarrow 3a = 60$$

$$\Rightarrow a = 20\text{m}$$

Area of the triangle =  $(\sqrt{3}/4) a^2$

$$= (\sqrt{3}/4) (20)^2$$

$$= (\sqrt{3}/4) (400)$$

$$= 100\sqrt{3}$$

Hence, Options D is the correct answer.

